











## Monday 7

Maths - money - how much change? Answer in your exercise book.

# Spring Shopping

Work out how much change you would get if you bought these items.

You buy	You Pay	Change
1 £1.00 		
2 80p 		
3 20p 		
4 60p 		

Challenge: Which coins could you get for your change?




Tally chart - copy the chart into your exercise book.

1		6	
2		7	
3		8	
4		9	
5		10	

## Spring Tally Chart

Count the objects to complete the tally chart.



Spring Picture	Tally	Total
Chick		
Egg		
Umbrella		
Lamb		
Daffodil		



English - write super sentences in your book.



# Writing Super Sentences

I can use a capital letter at the start of a sentence.

I can use a full stop at the end of a sentence.



1. Insert the capital letters and full stops to complete the sentences.

\_\_\_\_\_ atman has black boots \_\_\_\_\_



2. Use the words and pictures to help you to write your own super sentences, each with a capital letter and full stop.

a)

fast

this

superhero

can

run



\_\_\_\_\_  
\_\_\_\_\_  
\_\_\_\_\_

b)

greenman

strong

superhero

is

a



\_\_\_\_\_  
\_\_\_\_\_  
\_\_\_\_\_

3. Now write your own superhero sentence with a capital letter and full stop.

\_\_\_\_\_  
\_\_\_\_\_





Handwriting

# First 100 High Frequency Words Handwriting

Practise your weekly spelling words using cursive handwriting.

a

all

were

come

house

to

we

go


will

old



Foundation subjects -

PE - if you can go out in the garden - try to do some exercises.  
You can try some of these challenges inside or out.



Fitness Circuit Cards

### Skipping Track

Skip around the circuit:

- How many laps can you do?
- Are you faster than your friend?
- Can you skip backwards?



Fitness Circuit Cards

### Bunny Jumps

Do 10 bunny jumps:

- How far can you travel?
- How high can you jump?
- Can you jump higher or further than your friend?



Fitness Circuit Cards

### Tuck jumps

Do 10 tuck jumps:

- How high can you jump?
- Can you jump higher than your buddy?
- How many tuck jumps can you do without stopping?





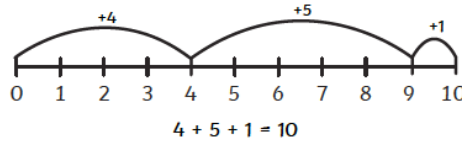
## Tuesday 7

Maths - addition - copy the number line into your exercise book.

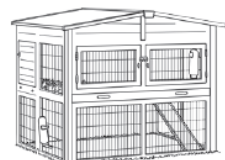
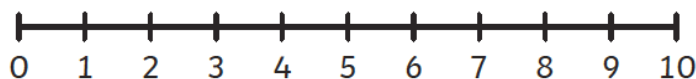
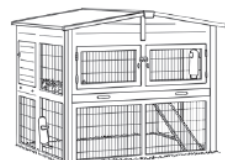
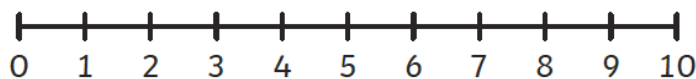
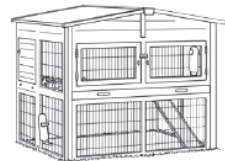
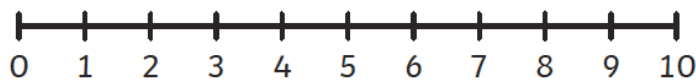
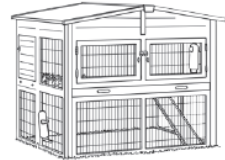
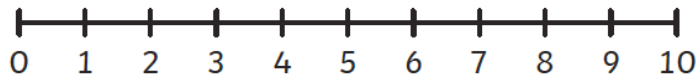
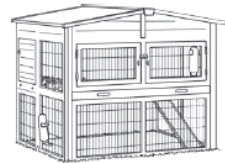
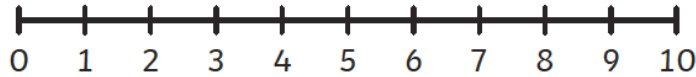


### 3 Hops to 10

Example



Peter Rabbit says he can get back to his run in 3 hops! Find different ways that Peter can do this and draw them on the number lines. Can you write number sentences to match his hops?



How many other ways can you find? Can you find them all?

English - Creative writing - answer the question below. Remember to use punctuation, capital letters, adjectives, adverbs and noun phrases.



You can draw your creature first if you like. Make sure you describe your fantasy pet in detail including what it looks like, what it sounds like and its character.

## If you could have any fantasy pet, what would it be and why?






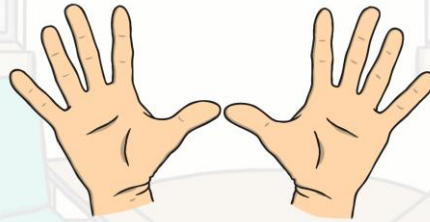
Foundation subjects

Music

Can you use your body to make sounds? Get someone else at home to join in.



What noises can you make with your fingers or hands?



What noises can you make with your mouth?




What sounds can you make with your feet?






**Can you...?**  
Stomp! Stamp! Tap!



**Can you think of any other sounds you can make with different parts of your body?**





## Wednesday 7

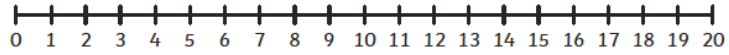
Maths - addition using a number line - draw the number lines in your book to help you work out the answer. Then write the number sentence.



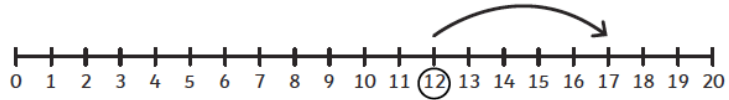
### Addition to 20 on a Number Line - Sheet 3

Practise what you have learnt so far on a number line to 20 and progress to see if you can draw your own number line!

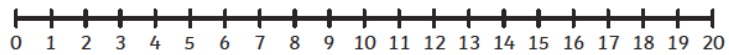
1.  $11 + 4 =$



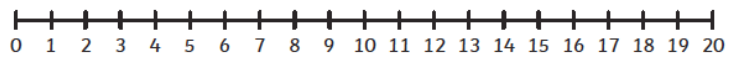
2.  +  =



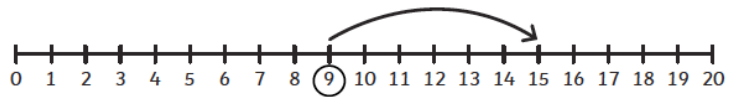
3.  $8 + 9 =$



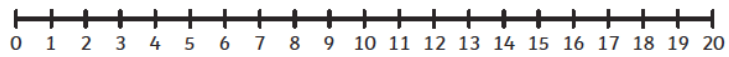
4.  $6 +$    $= 9$



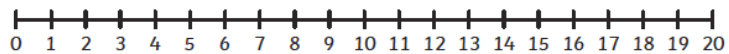
5.  +  =



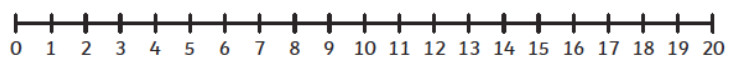
6.  + 7 = 11



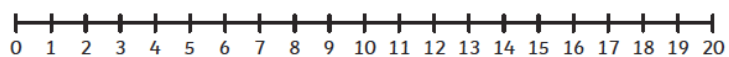
7.  $9 + 9 =$



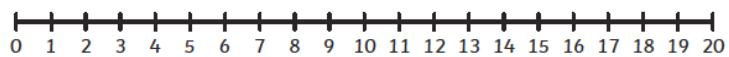
8.  $12 + 3 =$



9.  $7 + 9 =$



10.  $13 + 5 =$



English - Can you spot the common exception words that have been spelt incorrectly? Rewrite the paragraphs correctly - adding capital letters and correcting the spelling mistakes.



**Activity 3:**

Th weather wus so beutifull tудay that my clas were allowed to stay outside for ower art lesson. We sat on the gras and looked at preety, colourful flowers. I had a plante that looked like it was made from gowld because the sun was shining on it. There were lots of wilde flowers in our school forest. I hope we do a lesson like that agen soon.

**Activity 4:**

My parunts took me and some friends to a worter park at the weekend. It was great but ew cud hardly muve it was so brazy! There wer families everywhere, all queuing for different rides. A boy beehinde me tried to pushe in the queue, but hsi father told him off and said he had to be laste in the queue aftr that.



# First 100 High Frequency Words Handwriting

Practise your weekly spelling words using cursive handwriting.

for

be

it's

got

asked

at

like

see

their

saw



Foundation subjects

PSHE - Bullying and cyberbullying

Read the following slides. Then, in your books, explain what cyberbullying is.

## Cyberbullying

Unfortunately, some people choose to use technological devices to hurt others instead of helping them.

What do you think bullying means?

**This is not OK.**

Bullying is when someone chooses to hurt someone else on purpose with their actions or with their words.

It is most often something that happens more than once but it can also happen just once.

Whole Class Intelligence

## Cyberbullying

Bullying can happen in person or using a technological device.

Using technology in this way is unacceptable behaviour and can cause a lot of hurt and upset.

All bullying behaviours are wrong and unacceptable.

Whole Class Intelligence



## Cyberbullying

We can help to stop cyberbullying.

**True** – We can choose to never hurt others using a technological device and we can speak out if we see it happening to us or our friends.

Look at the following activity - there are four different examples of bullying and four responses. Can you match them up? In your books, now create a poster to explain to others what they should do if they are being cyberbullied? Who can they tell? How can they get help?



If you see a nasty message on a phone, show and tell an adult you trust.

If you see someone being unkind online, show and tell an adult you trust.



If your friend tells you they have seen an unkind picture, tell them to talk to an adult they trust.

If you feel frightened about how someone has treated you online, tell an adult you trust and ask them to help you.

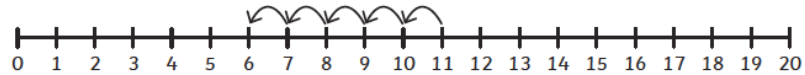


## Thursday 7

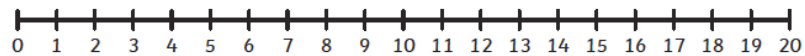
Maths - subtraction - draw a number line in your book to help you.

### Subtraction within 20 on a Number Line

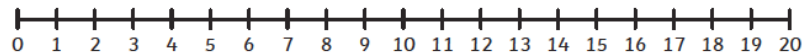
$11 - 5 = \boxed{6}$



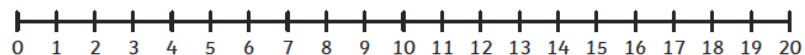
$10 - 7 = \boxed{\phantom{0}}$



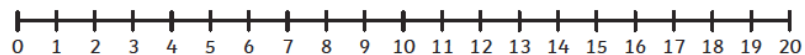
$8 - 4 = \boxed{\phantom{0}}$



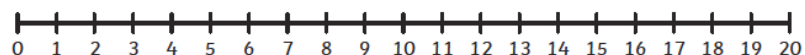
$9 - 5 = \boxed{\phantom{0}}$



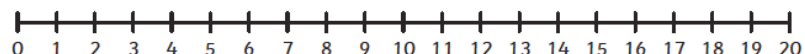
$13 - 2 = \boxed{\phantom{0}}$



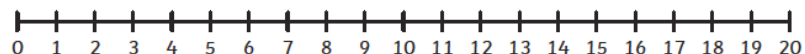
$7 - 4 = \boxed{\phantom{0}}$



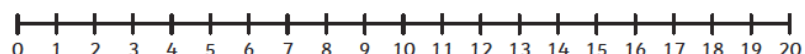
$19 - 8 = \boxed{\phantom{0}}$



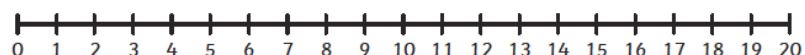
$20 - 1 = \boxed{\phantom{0}}$



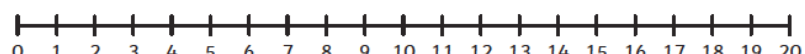
$14 - 3 = \boxed{\phantom{0}}$



$16 - 3 = \boxed{\phantom{0}}$



$12 - 6 = \boxed{\phantom{0}}$





English - correct the punctuation - rewrite the sentences with the correct punctuation in your book.

## Correct the Sentence Punctuation

Write the correct sentence underneath by adding in capital letters, full stops and question marks.

1. my brother's dog is called tess

---

2. on sunday she went to the park

---

3. the titanic sank in 1912

---

4. toby and mark are going to spain in march

---

5. martha took her children to the zoo yesterday

---

6. when i go to the shop i will get some crisps

---

7. sameera and i are going to town on friday

---

8. did you sell buns at the fair

---

9. my mum has a cat he is called tom

---

10. have you got a dress for the prom

---



## Correct the Sentence Punctuation

Write the correct sentence underneath by adding in capital letters, full stops, question marks and inverted commas.

1. one warm, sunny day jessica and lilly went to the zoo when they arrived, they visited the monkeys

---

---

2. i like the zoo, said jessica lilly looked up and saw a monkey had stolen her lunchbox

---

---

3. do we have any money to buy more food asked jessica

---

---

4. lilly replied no now we dont have anything for lunch

---

---

5. dont worry girls, a voice called from behind them it was the zookeeper, who was holding their lunchbox, with a big smile on his face

---

---



## Foundation subjects

PE - if you can go out in the garden - try to do some exercises.  
You can try some of these challenges inside or out.

Fitness Circuit Cards

### Ski Jumps

Do 20 ski jumps:

- You can jump on the spot or travel forward.
- Can you travel backwards?
- What happens if you ski jump using your arms to propel you?
- What happens if you **don't** use your arms?

Fitness Circuit Cards

### Line Jumps

Face a line and jump forwards and backwards over the line:

- What happens if you jump using your arms to propel you?
- What happens if you **don't** use your arms?
- How many jumps can you do in a minute?

Fitness Circuit Cards

### Hopping

Hop around the circuit:

- How many laps can you do?
- How many hops can you do before you need to swap legs?



Fitness Circuit Cards

### Tiptoe Walking

Tip toe around the circuit:

- Can you tip toe fast?
- Can you tip toe slowly?






## Friday 7

Maths - quick test - how many can you answer in 5 minutes? Correct any that you get wrong.

**Addition and Subtraction Facts to 20 – Speed Test**

See how long it takes you to complete all of these or give yourself a set amount of time (say 5 mins) and see how many you can do.



$6 + 6 =$	$8 - 6 =$	$9 - 3 =$	$13 - 4 =$	$4 - 1 =$
$14 + 5 =$	$2 + 17 =$	$7 - 4 =$	$4 + 9 =$	$4 - 2 =$
$9 - 7 =$	$3 + 9 =$	$15 - 1 =$	$20 - 10 =$	$10 - 5 =$
$2 + 11 =$	$3 + 1 =$	$14 - 7 =$	$17 + 2 =$	$2 + 3 =$
$2 + 15 =$	$3 - 2 =$	$9 + 3 =$	$6 + 4 =$	$15 - 6 =$
$7 - 3 =$	$11 + 5 =$	$8 - 5 =$	$7 + 8 =$	$4 + 6 =$
$10 + 10 =$	$18 - 4 =$	$3 + 4 =$	$20 - 19 =$	$4 + 9 =$
$8 - 2 =$	$10 + 0 =$	$8 + 8 =$	$14 + 2 =$	$7 - 2 =$
$11 + 1 =$	$13 - 5 =$	$17 - 2 =$	$9 - 4 =$	$19 + 1 =$
$14 - 1 =$	$12 - 9 =$	$3 + 7 =$	$5 + 5 =$	$15 - 9 =$

Correct answers:

Time:

English - copy the sentences into your book and add the conjunctions.



# Using Different Types of Conjunction

L.O: To recognise and use different types of conjunctions.

Choose the correct type of conjunction from the box to complete these sentences.

## Coordinating Conjunctions

and

but

or

so

## Subordinating Conjunctions

although

because

so that

even if

whenever

before

even  
though

until

## Correlative Conjunctions

whether/or

either/or

both/and

not only/but

## Questions

1. I went to bed very late \_\_\_\_\_ I am tired today.
2. My dad has fixed my bike \_\_\_\_\_ I can take it to the park.
3. We are having \_\_\_\_\_ pasta \_\_\_\_\_ curry for dinner
4. I listened to the weather forecast \_\_\_\_\_ put an umbrella in my bag.
5. I will always support my local team, \_\_\_\_\_ they always lose!
6. The weather is forecast to be \_\_\_\_\_ hot \_\_\_\_\_ humid.
7. My brother is grumpy \_\_\_\_\_ he has got to do his homework.
8. He goes abroad on holiday, \_\_\_\_\_ he doesn't like flying.
9. My mum is \_\_\_\_\_ a brilliant doctor, \_\_\_\_\_ she is a great runner too.
10. I enjoy playing hockey \_\_\_\_\_ it's not my favourite sport.
11. We could go to the park \_\_\_\_\_ to the cinema.
12. I'm not sure \_\_\_\_\_ I'm going to the match \_\_\_\_\_ not.



# Using Different Types of Conjunction

L.O: To recognise and use different types of conjunctions.

Choose the correct type of conjunction from the box to complete these sentences.

## Coordinating Conjunctions

and

but

or

so

## Subordinating Conjunctions

although

because

so that

even if

whenever

before

even  
though

until

## Correlative Conjunctions

whether/or

either/or

both/and

not only/but

## Questions

1. I went to bed very late \_\_\_\_\_ I am tired today.
2. My dad has fixed my bike \_\_\_\_\_ I can take it to the park.
3. We are having \_\_\_\_\_ pasta \_\_\_\_\_ curry for dinner
4. I listened to the weather forecast \_\_\_\_\_ put an umbrella in my bag.
5. I will always support my local team, \_\_\_\_\_ they always lose!
6. The weather is forecast to be \_\_\_\_\_ hot \_\_\_\_\_ humid.
7. My brother is grumpy \_\_\_\_\_ he has got to do his homework.
8. He goes abroad on holiday, \_\_\_\_\_ he doesn't like flying.
9. My mum is \_\_\_\_\_ a brilliant doctor, \_\_\_\_\_ she is a great runner too.
10. I enjoy playing hockey \_\_\_\_\_ it's not my favourite sport.
11. We could go to the park \_\_\_\_\_ to the cinema.
12. I'm not sure \_\_\_\_\_ I'm going to the match \_\_\_\_\_ not.



Handwriting

## First 100 High Frequency Words Handwriting

Practise your weekly spelling words using cursive handwriting.

said

can

little

into

too

in

are

as

back

by



## Foundation subjects

PE - if you can go out in the garden - try to do some exercises.  
You can try some of these challenges inside or out.

Fitness Circuit Cards

### Star Jumps

Do star jumps for one minute:

- How many can you do?



Fitness Circuit Cards

### Step Ups

Find a bench or step and do step ups – one leg at a time, for a minute:

- How many steps can you do?
- Can you do jump ups? (both legs at once)

Fitness Circuit Cards

### Sprints

Sprint the length of the court, then walk back. Repeat this for 1 minute:

- How many lengths can you do?



Fitness Circuit Cards

### Push Ups

Do push ups for a minute:

- How many can you do?
- Can you do push ups with one hand or one foot?
- If it is hard, you can do push ups with your knees down.

