




EWPS Reception Week 8

Read a book or an online story every day.

My Phase 3 Sound Mat

j 	v 	w 	x 	y 	z 	zz 	qu 
ch 	sh 	th 	ng 	ai 	ee 	igh 	oa 
oo 	oo 	ar 	or 	ur 	ow 	oi 	ear 
air 	ure  Pure	er 	 visit twinkl.com				







EWPS Reception Week 8



Doubles to 20

Dice Doubles



Write the number sentence for each dice double.

 $+$  $1 + 1 = \underline{\hspace{2cm}}$

 $+$  $2 + 2 = \underline{\hspace{2cm}}$

 $+$  $3 + 3 = \underline{\hspace{2cm}}$

 $+$  $4 + 4 = \underline{\hspace{2cm}}$





















 $+$  $5 + 5 = \underline{\hspace{2cm}}$



EWPS Reception Week 8

Size Matching Activity

Circle the picture that is the same size as the first picture.



EWPS Reception Week 8



**Make a trail and
follow it.**

twinkl.co.uk



Do 5 star jumps.

twinkl.co.uk




EWPS Reception Week 8


Doubles to 20

Dice Doubles

Write the number sentence for each dice double.




+




$6 + 6 = \underline{\quad}$




+



$7 + 7 = \underline{\quad}$




+



$8 + 8 = \underline{\quad}$




+



$9 + 9 = \underline{\quad}$



+





$10 + 10 = \underline{\quad}$



EWPS Reception Week 8

Aa



apple





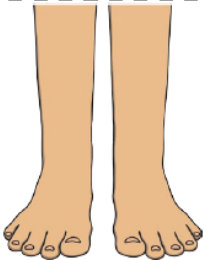


EWPS Reception Week 8

Phase 3 Vowel Graphemes I Can Read!

Read the words and match the picture to the word.

weep	feet	jeep
meet	week	deep




		
		Monday Tuesday Wednesday Thursday Friday Saturday Sunday

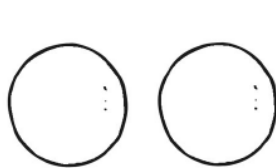
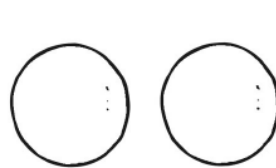






EWPS Reception Week 8




Space Addition Sheet

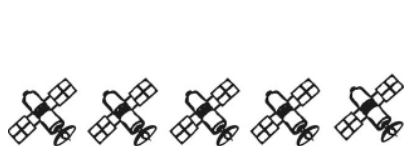
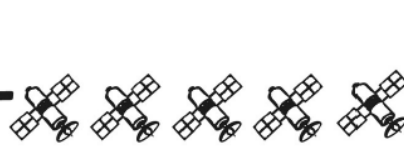

Write the answers in the circles.

 $+$  $=$ 

 $+$  $=$ 

 $+$  $=$ 

 $+$  $=$ 


 $+$  $=$ 





EWPS Reception Week 8


Life Cycle of a Frog Early Writing Activity


Look at the life cycle of a frog. Can you write about how a tadpole changes as it grows? Use the boxes at the top to help you.


pond 


water 




frog 

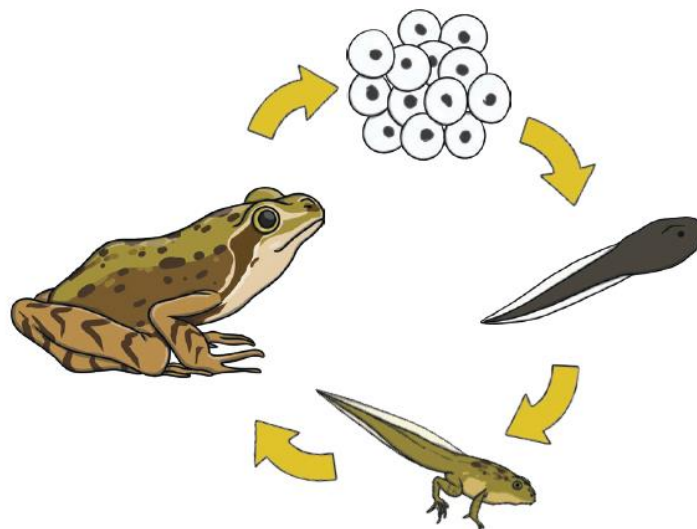
frogspawn 

tadpole 

froglet 

lily pad 

 sound it out
 finger spaces
 full stop





EWPS Reception Week 8

Life Cycle of a Frog Early Writing Activity

Write a sentence about each of the pictures to explain the life cycle of a frog. Use the boxes at the top to help you.

pond



frog



tadpole



frogspawn



froglet



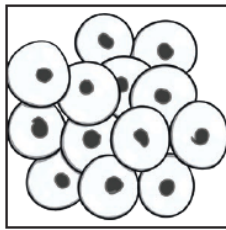
sound it out

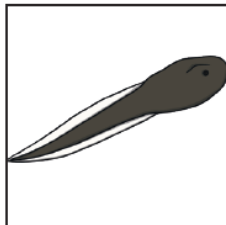



finger spaces




full stop














EWPS Reception Week 8

Space Addition and Subtraction Puzzle

Work out the answers to the calculations in the puzzle,
then colour in the area using the colour guide below:

Orange	Yellow	Brown	Blue
10	6	5	3







EWPS Reception Week 8

How Much Do the Ice Creams Cost?


How much does each ice cream cost? Look at the coins and write the total amount in the circle.





EWPS Reception Week 8

Create the letter 'a'



© Teacher's Pet 2012 www.tpet.co.uk

Can you use playdough to make a picture of an apple?



EWPS Reception Week 8



**Jump between the
hoops.**

twinkl.co.uk




**How many times can
you hop on one foot?**

twinkl.co.uk



EWPS Reception Week 8



Sentence Unscramble



I can make the sentence

I can draw a picture of the sentence

I can write the sentence

Handwriting practice lines consisting of four sets of three horizontal lines (top solid, middle dashed, bottom solid).



The	was	dish.	fish	on	the
-----	-----	-------	------	----	-----




EWPS Reception Week 8

Phase 3 Vowel Graphemes I Can Read!

Read the words and match the picture to the word.


hail	pain	aim
sail	tail	nail










EWPS Reception Week 8

Count and Graph



					
1					
2					
3					
4					
5					




EWPS Reception Week 8

Phase 3 Vowel Graphemes I Can Read!

Read the words and match the picture to the word.

high	light	night
right	sight	fight





EWPS Reception Week 8



Time to practise our numbers.

2

Carefully trace over the numbers.

2 2 2 2 2 2 2 2 2

Have a go at writing your own number 2.

Can you draw
2 dinosaurs?






EWPS Reception Week 8

How Much Do the Ice Creams Cost?

How much does each ice cream cost? Look at the coins and write the total amount in the circle.





EWPS Reception Week 8



Time to practise our letters.

Aa

Carefully trace over the capital and lower case letters.

Aa Aa Aa Aa

Have a go at writing your own Letter Aa.

A

a



___pple



___nt



Teachers
Copyright www.tpet.co.uk

Can you look at the pictures and fill in the missing initial letter?




EWPS Reception Week 8


Doubles to 20

Ladybird Doubles


Write the number sentence for each ladybird double.




$1 + 1 = \underline{\quad}$




$2 + 2 = \underline{\quad}$



$3 + 3 = \underline{\quad}$



$4 + 4 = \underline{\quad}$



$5 + 5 = \underline{\quad}$



EWPS Reception Week 8



Sentence Unscramble



I can make the sentence

I can draw a picture of the sentence

I can write the sentence

Handwriting practice lines consisting of solid top and bottom lines with a dashed middle line. There are four sets of these lines for writing practice.

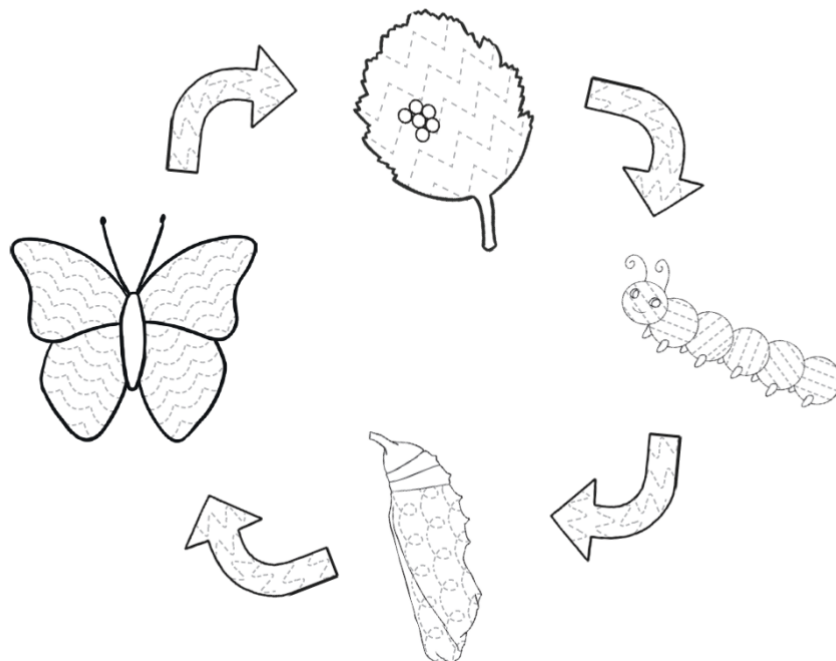


silver	Jim	has	coins.	seven
--------	-----	-----	--------	-------



EWPS Reception Week 8

Butterfly Life Cycle Pattern Tracing Activity



Time to practise our letters.

Cc

Carefully trace over the capital and lower case letters.

Cc

Cc

Cc

Cc

Cc

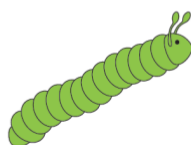
Have a go at writing your own letter Cc.

C

c



___ at



___ aterpillar



Copyright www.tpet.co.uk

Can you look at the pictures and fill in the missing initial letter?



EWPS Reception Week 8

Learning at Home



★ Numbers are all around us. How many different places can you see the number 9 around your home?
Draw some of things that have a number 9 on them.

★ Tell an adult in your home 5 things you know about the number 9.

★ Example:
I know that $9 = 3+3+3$ or 3×3




★ Can they think of any different facts about 9?



Copyright 2012 Teacher's Pet www.tpet.co.uk



EWPS Reception Week 8

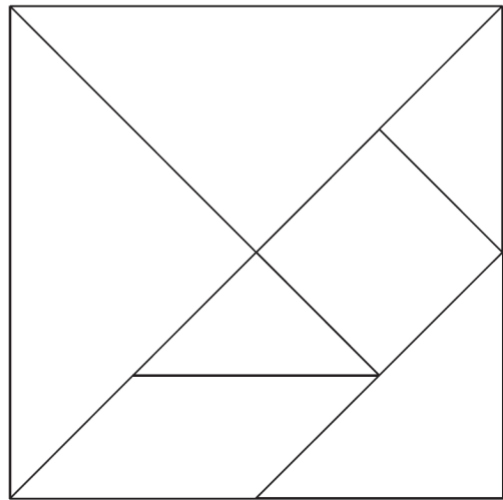


Use the 7 coloured or white shapes to create the pictures shown on the cards.

Tangram puzzles pieces


There are 7 pieces in total which will need to be cut out individually.

We would recommend laminating the pieces so that they can be reused.





EWPS Reception Week 8



Sentence Unscramble



I can make the sentence

I can draw a picture of the sentence

I can write the sentence

Handwriting practice lines consisting of solid top and bottom lines with a dashed middle line. There are four sets of these lines for writing practice.



is	The	torch	red.	dark
----	-----	-------	------	------



EWPS Reception Week 8



Time to practise our letters.

Aa

Carefully trace over the capital and lower case letters.

Aa Aa Aa Aa Aa

Have a go at writing your own Letter Aa.

A

a



___pple



___nt



Copyright www.tpet.co.uk

Can you look at the pictures and fill in the missing initial letter?