
















## Day 1 (Phonics)

**My Phase 3 Sound Mat**

j 	v 	w 	x 	y 	z 	zz 	qu 
ch 	sh 	th 	ng 	ai 	ee 	igh 	oa 
oo 	oo 	ar 	or 	ur 	ow 	oi 	ear 
air 	ure 	er 					

**Task:**

**Complete the table below**


<u>Read</u>	<u>Cover</u>	<u>Check</u>
stair		
thumb		
town		
chain		
green		
night		
goat		
fish		
ring		


**Challenge:**

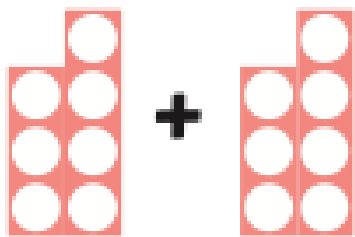
Can you write sentences using these words?


Day 1 (Mathematics)

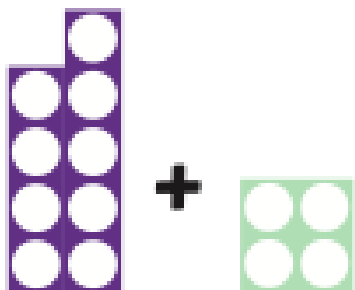
Number Shape Addition to 20

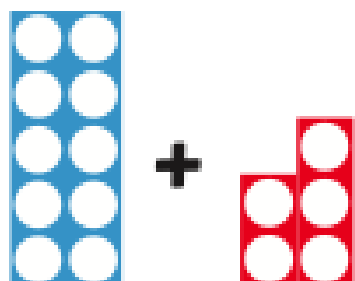
 $+$  $=$

 $+$  $=$

 $+$  $=$

 $+$  $=$

 $+$  $=$


 $+$  $=$

## Day 1: (PSHE)

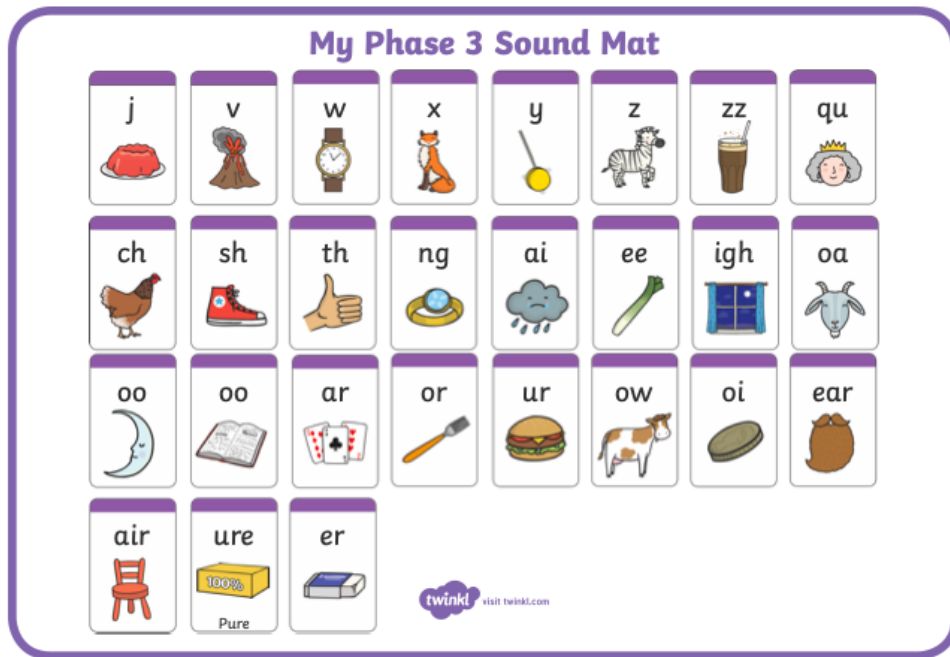
Sleep is very important. Can you think of reasons why?

### Getting Ready for a Sleep

What things do you need before you can go to sleep?



Day 2 (phonics)



**Task:**  
Complete the table below

<u>Read</u>	<u>Cover</u>	<u>Check</u>
pure		
rubber		
clown		
beard		
seen		
right		
groan		
sheet		
queen		

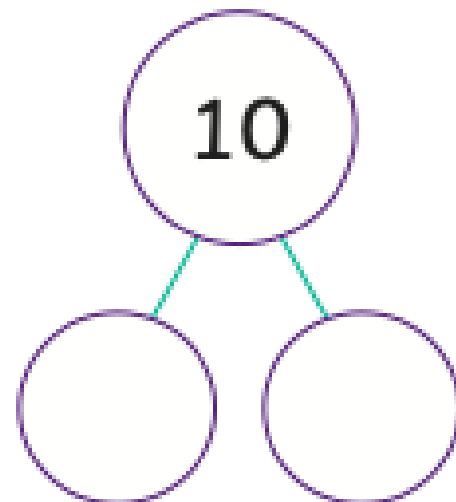
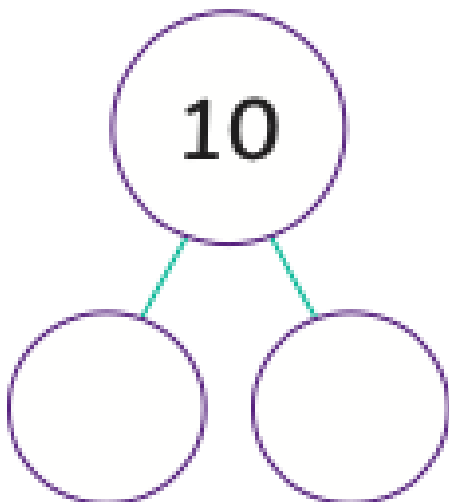
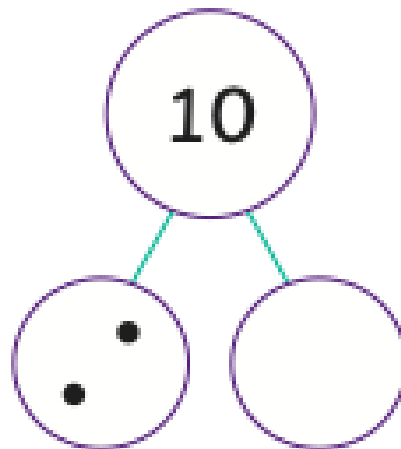
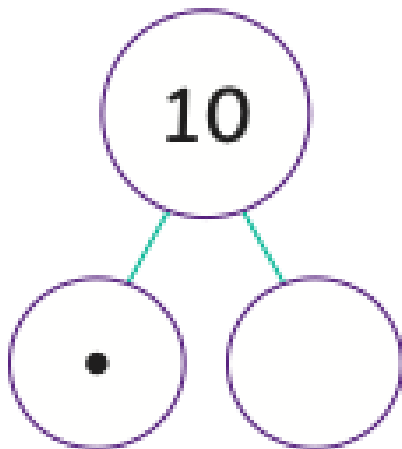
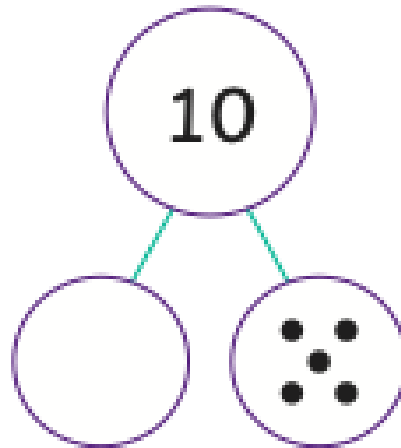
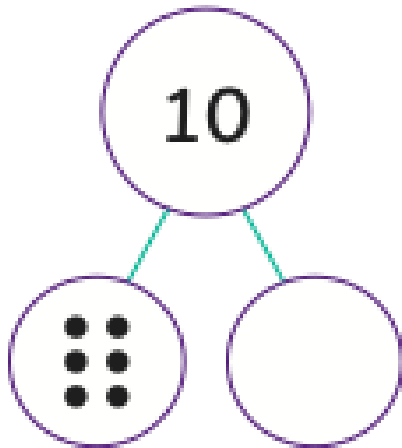
**Challenge:**

Can you write sentences using these words?

Day 2 (Mathematics)


**Part-Whole Number Bonds to 10**

Can you make these numbers bonds to 10?



Day 2 (Understanding the world)

# In the spring I see...

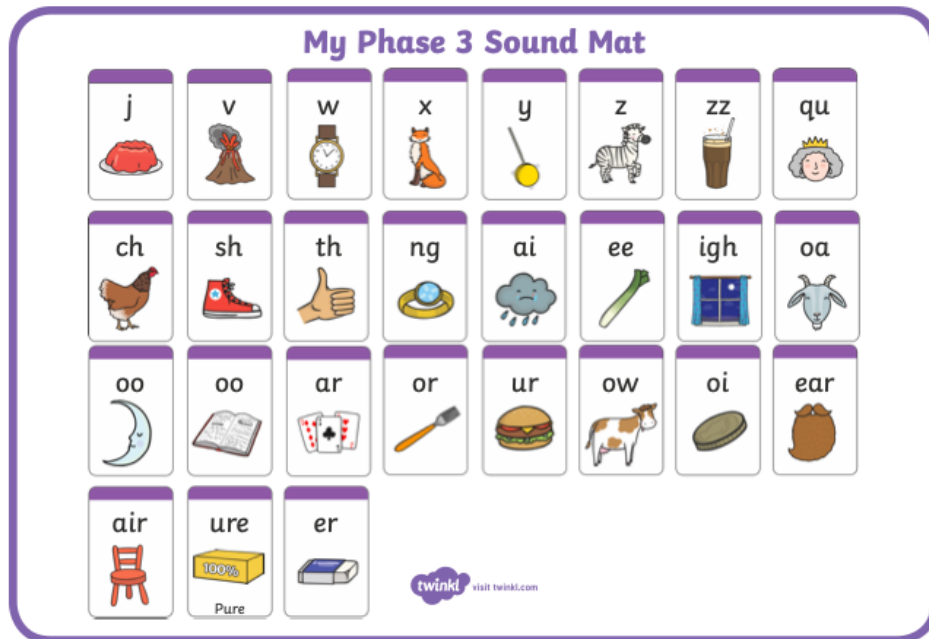


---

---

---

## Day 3 (Phonics)



**Task:**

Complete the table below

<u>Read</u>	<u>Cover</u>	<u>Check</u>
fizz		
sister		
burger		
moon		
book		
star		
coin		
loan		
quick		

**Challenge:**

Can you write sentences using these words?

Day 3 (Mathematics)

**Addition and  
Subtraction to 20  
with a Number Line**

Example:	
$11 - 5 = 6$	

Can you work out the answer and draw a picture or write a sentence about it?  
The first one is done for you.

<p><b>18 - 6 =</b></p>	<p><i>My Dad buys 18 eggs but breaks 6 of them. How many eggs does he have left?</i></p>
<p><b>8 + 12 =</b></p>	
<p><b>11 + 9 =</b></p>	
<p><b>17 - 8 =</b></p>	



### Day 3 (Science)


Think about a butterfly. What does it look like? What can it do? Does it change?


## Life Cycle of a Butterfly Writing Activity

Write a sentence about each part of the life cycle of a butterfly.  
Use the boxes at the top to help you.


eggs 


caterpillar 


butterfly 


chrysalis 

leaf 

 sound it out


 finger spaces

 full stop



---

---




---

---



---

---










---

---

Day 4 (Phonics)

**My Phase 3 Sound Mat**

j 	v 	w 	x 	y 	z 	zz 	qu 		
ch 	sh 	th 	ng 	ai 	ee 	igh 	oa 		
oo 	oo 	ar 	or 	ur 	ow 	oi 	ear 		
air 	ure 	er 							

**Task:**  
Complete the table below

<u>Read</u>	<u>Cover</u>	<u>Check</u>
cards		
hurt		
flower		
soon		
look		
mark		
join		
toast		
quiz		

**Challenge:**  
Can you write sentences using these words?

Day 4 (Mathematics)Can you solve these calculations?

# Number Bonds Challenges

## Number Bonds Challenge 1

$1 + 4 =$	$0 + 5 =$	$3 + 2 =$
$3 + 3 =$	$2 + 4 =$	$3 + 3 =$
$4 + 1 =$	$1 + 4 =$	$4 + 2 =$
$6 + 0 =$	$5 + 1 =$	$5 + 0 =$
$2 + 4 =$	$4 + 2 =$	$2 + 4 =$
$3 + 2 =$	$0 + 5 =$	$3 + 3 =$
$5 + 1 =$	$6 + 0 =$	$1 + 5 =$
$0 + 6 =$	$2 + 4 =$	$6 + 0 =$
$3 + 3 =$	$5 + 1 =$	$4 + 1 =$
$2 + 3 =$	$3 + 2 =$	$0 + 5 =$
$3 + 2 =$	$4 + 1 =$	$5 + 1 =$
$1 + 5 =$	$0 + 5 =$	$2 + 4 =$
$3 + 3 =$	$2 + 3 =$	
$4 + 2 =$	$1 + 4 =$	

Day 4 (Physical development)

# Building a Den

You are going to build a den. But where do you start? Your den needs to be in a safe place where you have lots of room. Plan your den before you start making it.

Where will your den be?

---

---

---

---

---

---

---

What do you need to build it?

---

---

---

---

---

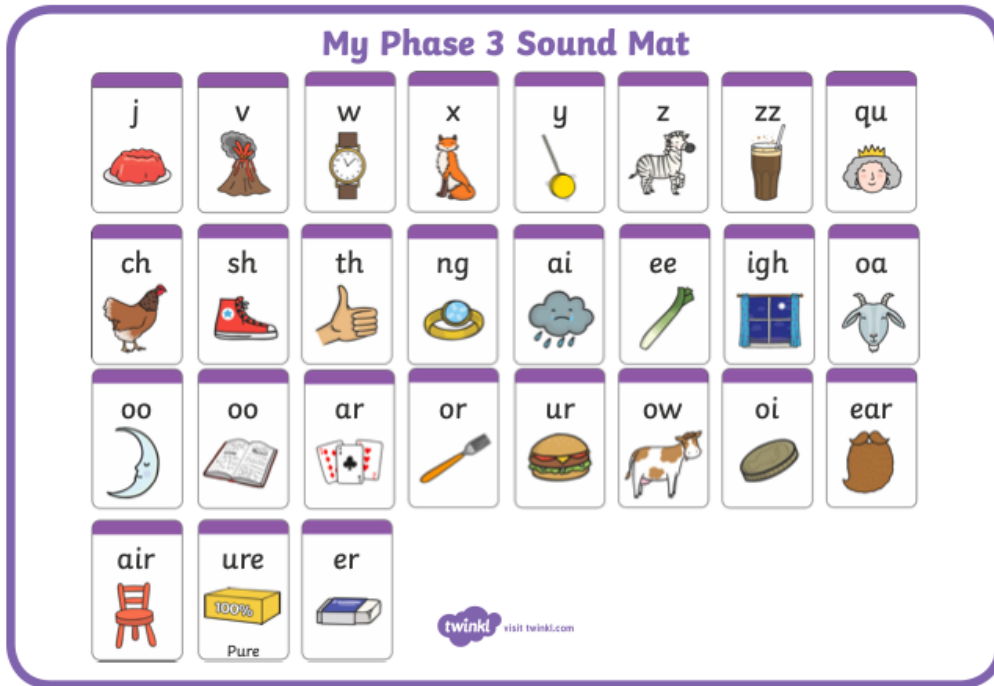
---

---

What will it look like?



Day 5 (Phonics)




**Task:**  
Complete the table below

<u>Read</u>	<u>Cover</u>	<u>Check</u>
chin		
turn		
power		
spoon		
hook		
chart		
oil		
boat		
quack		

**Challenge:**  
Can you write sentences using these words?

Day 5 (Mathematics)

**How much money is in my jar?**



Day 5 (Creative writing)

**How did this pirate get stuck  
on a deserted island?**



---

---

---

---

---

---

---

---